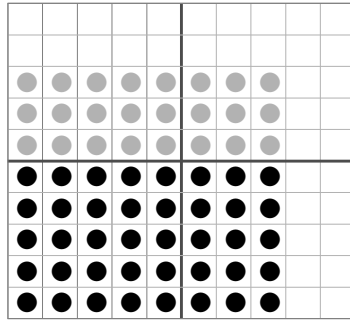
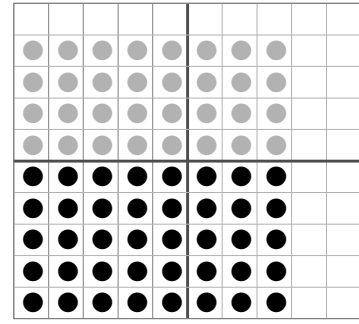


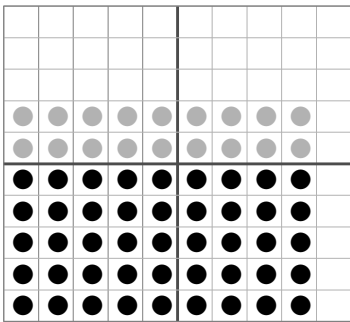
$$\square \times \square = \square$$



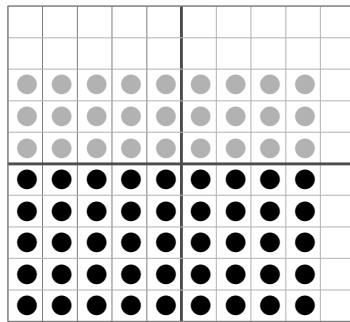
$$\square \times \square = \square$$




$$\square \times \square = \square$$



$$\square \times \square = \square$$



$$\square \times \square = \square$$



$$\square \times \square = \square$$

3. 빈칸에 알맞은 답을 쓰시오.

$$6 \times 5 = \square$$

$$7 \times 5 = \square$$

$$6 \times 6 = \square$$

$$7 \times 6 = \square$$

$$6 \times 7 = \square$$

$$7 \times 7 = \square$$

$$6 \times 8 = \square$$

$$7 \times 8 = \square$$

$$6 \times 9 = \square$$

$$7 \times 9 = \square$$

$8 \times 5 = \square$

$9 \times 5 = \square$

$8 \times 6 = \square$

$9 \times 6 = \square$

$8 \times 7 = \square$

$9 \times 7 = \square$

$8 \times 8 = \square$

$9 \times 8 = \square$

$8 \times 9 = \square$

$9 \times 9 = \square$

3. 빈칸에 알맞은 답을 쓰시오.

$9 \times 8 = \square$

$8 \times 7 = \square$

$6 \times 7 = \square$

$7 \times 9 = \square$

$7 \times 8 = \square$

$8 \times 8 = \square$

$6 \times 9 = \square$

$7 \times 7 = \square$

$8 \times 9 = \square$

$9 \times 9 = \square$

$6 \times 8 = \square$

$9 \times 7 = \square$